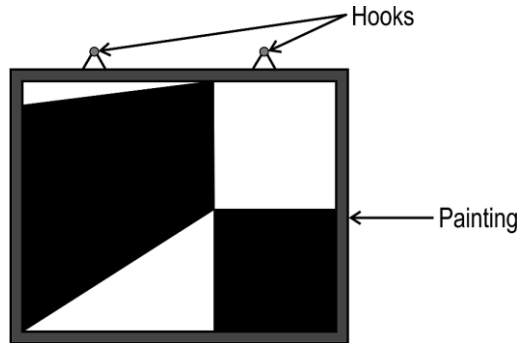


GRADE - 3

Practice questions -Competency Assessments

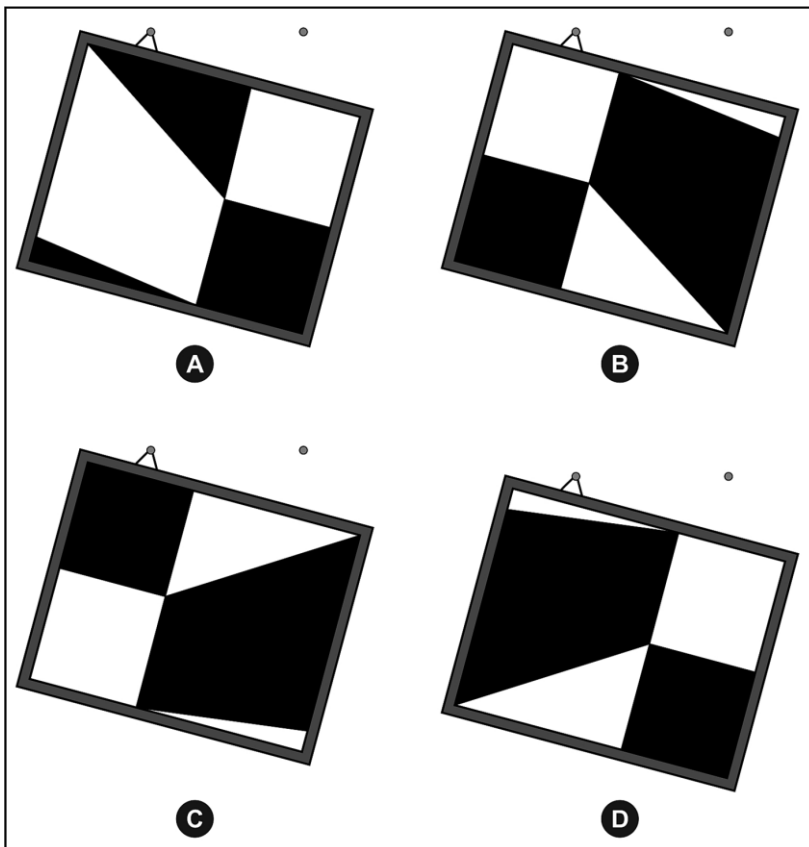
MATHEMATICS

Q1 A painting with two hooks is hung on a wall.



One of the hooks breaks.

Which of the following shows the same painting hanging on one hook?



Q2 A green bus and a blue bus were used to take some students for a picnic. There were 57 students in the green bus. The blue bus had 13 MORE students than the green bus.

Which of these gives the TOTAL number of students going for the picnic?

A. $57 - 13$

B. $57 + 13$

C. $57 + 57 - 13$

D. $57 + 57 + 13$

Q3 Shown below are the prices of some items.



Rs 7



Rs 25

Sanjana bought TWO chocolates and ONE packet of bread.
What is the total amount she must pay?

- A. 32 B. 39 C. 57 D. 64

Q4 Which of the following options is the same as $6 + 8 + 4$?

- A. $6 \times 4 \times 8$ B. $10 + 8$ C. $64 + 8$ D. 684

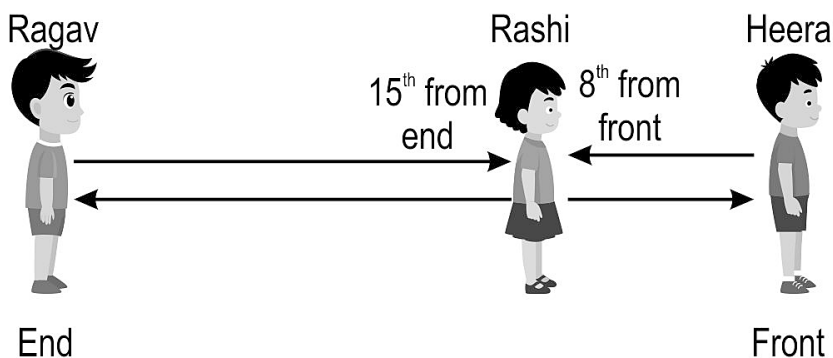
Q5 Given below are the dates of birth of four friends:

Ryan - 5 January 2013
Siddhi - 1 August 2012
Alina - 31 December 2013
Krish - 15 March 2012

Who turned 1 year old first?

- A. Ryan B. Siddhi C. Alina D. Krish

Q6 Rashi is standing in a queue. Her position in the queue is as shown below.



How many people are there in the queue in all?

- A. 23 B. 22 C. 21 D. 15

Q7 What is the correct number to fill in the blank given below?

6, 12, 18, _____, 30, 36

A. 22

B. 24

C. 26

D. 28

Q8 A vendor has the following coins/notes. What is the total amount he has?

Coins/Notes	₹2 coins	₹5 coin	₹20 note	₹50 note
Numbers	3	1	1	1

A. ₹ 77

B. ₹ 79

C. ₹ 89

D. ₹ 81

Q9 Pooja has 5 red pens and 2 green pens.

Which of the following friends have the same number of pens as Pooja?

Sahil has 7 red pens and 3 green pens.

Rahul has 8 red pens and 3 green pens.

Suvya has 7 red pens and 1 green pen.

Tiya has 3 red pens and 4 green pens.


A. Sahil

B. Tiya

C. Suvya

D. Rahul

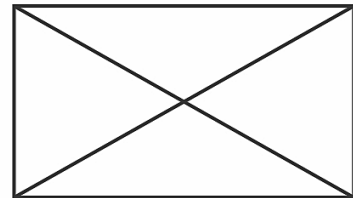
Q10 Shown below are three figures - 1, 2 and 3.



1



2



3

Which of these figures is/are made of ONLY STRAIGHT lines?

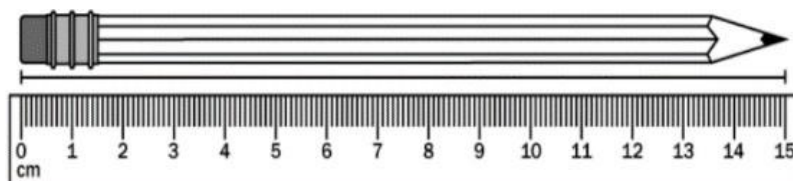
A. only 1

B. only 1 and 2

C. only 1 and 3

D. all - 1, 2 and 3

Q11 What is the length of the pencil?



A. 11 cm

B. 12 cm

C. 14 cm

D. 15 cm

Q12 There are 32 balls in a room. These balls must be equally shared among 4 children. How many balls will each child get?


A. 8

B. 7

C. 9

D. 6

Q13 Look at the picture. Which vegetable is the heaviest?



A. Turnip

B. Tomato

C. Carrot

D. Corn

Q14 Which of the clocks shows 7 o'clock?




A



B



C



D

A. A

B. B

C. C

D. D

Q15 Choose the option with the numbers arranged from largest to smallest.



A. 91, 92, 93, 94, 95

B. 91, 93, 92, 94, 95

C. 95, 94, 93, 92, 91

D. 95, 93, 92, 94, 91

ENGLISH

Reading comprehension 1:

Read the passage and answer the following questions.



Crocodiles lay their eggs and cover them with sand. After three months, the baby crocodiles are ready to come out of the eggs. But the babies cannot dig their way out of the sand above them. They peep out and make some sound while hatching out of their shells. At that time, the mother, who has been guarding them, hears them. She then digs them free.

Q1 Who guards the eggs before they hatch?

- A. the brother crocodile
- B. the sister crocodile
- C. the mother crocodile
- D. the father crocodile

Q2 Where do the crocodiles hide their eggs?

- A. behind the stones
- B. in the water
- C. under the sand
- D. under the rocks

Q3 Why does the mother crocodile dig her babies out of the sand?

- A. The babies cannot come out by themselves.
- B. The babies start fighting with each other.
- C. She is saving them from enemies.
- D. She is playing a game with them.

Q4 How many months does it take for the baby crocodiles to come out of the eggs?

- A. one
- B. two
- C. three
- D. Four

Q5 Who peeps out and makes some noise while hatching out of their shells?

- A. the grandfather crocodile
- B. the father crocodile
- C. the baby crocodile
- D. the mother crocodile

Read the given passage and answer the questions.

Mr. Prakash, the physical education teacher, gave important instructions for playing football safely. "Always share the ball with friends. Do not push anyone. Drink water and take a little rest if you feel tired. Stay in the playground area. Go back to the classes as soon as you hear the bell. If you see someone hurt, tell a teacher right away. Remember, playing is fun when everyone follows the rules and stays safe."

Q11 Who is Mr. Prakash?

- A. A sports player
- B. A yoga teacher
- C. A physical education teacher
- D. A history teacher

Q12 What were the instructions about?

- A. Going to the classrooms
- B. Having fun
- C. Drinking water
- D. Playing safely

Q13 Which instruction was NOT given?

- A. Share the ball with friends
- B. Turn around and pass the ball
- C. Go to the class on hearing the bell
- D. Follow the rules

Q14 When were students asked to tell a teacher?

- A. If someone hits them
- B. If someone makes fun of them
- C. If they see someone injured
- D. If someone needs help

Q15 When is playing fun?

- A. If everyone pushes each other
- B. If everyone is hurt
- C. If everyone shares the ball
- D. If everyone follows the rules

ENVIRONMENTAL SCIENCE

Q1 Which of the following contains food items obtained from BOTH plant and animal sources?

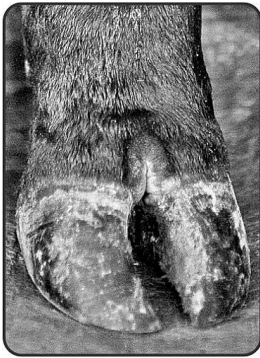
- A. milk and toast
- B. honey and curds
- C. boiled egg and cheese
- D. orange juice and potato wafers

Q2 What is common to these parts of the human body?

eyes, ears, nose, nails

- A. They are found in pairs.
- B. They are all seen on the head.
- C. They can be seen outside the body.
- D. They help us to know our surroundings.

Q3 The foot of an animal is shown below.



Which of the following animals could it be?

- A. elephant
- B. lion
- C. dog
- D. cow

Q4 Which of the following shows a part of a cat's face?



A



B

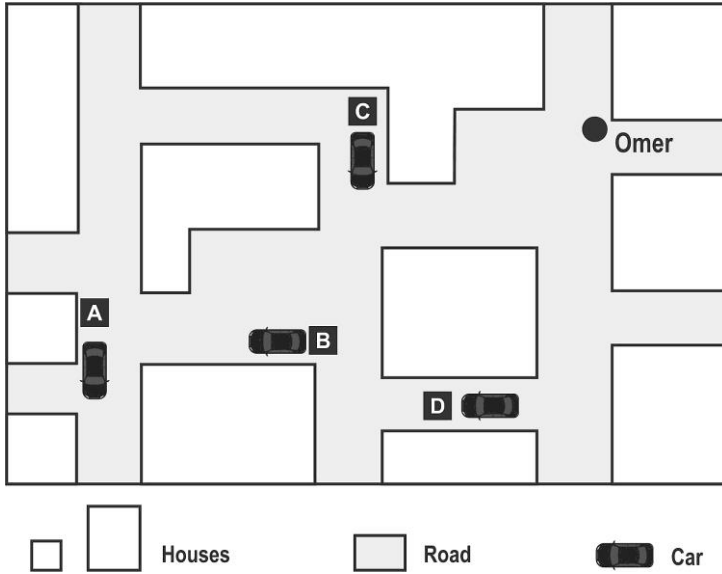


C



D

Q5 Which of the parked cars will Omer be able to see from the place where he is standing?



A. A

B. B

C. C

D. D

Q6 Which of the following food items has DEFINITELY been prepared by cooking?




Chopped fruits

A




Watermelon juice

B



Vegetable salad

C



Potato chips

D

Q7 How many animals are there in the picture?



A. 2

B. 3

C. 4

D. 5

Q8 Which of the following is the best device to store fruits and prevent them from rotting?

- A. Refrigerator
- B. Washing machine
- C. Television
- D. Radio

Q9 Which two colours should you mix to make grey?

- A. Purple and Orange
- B. Black and White
- C. Red and Blue
- D. Yellow and White

Q10 You see a bird building a nest in a tree. Why do birds build nests?

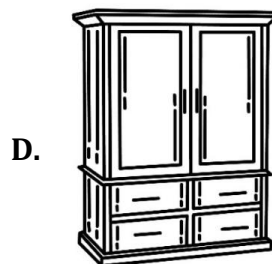
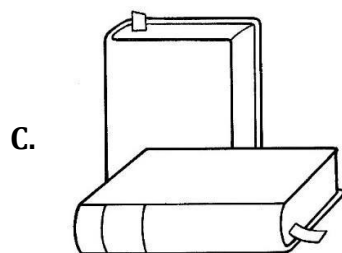
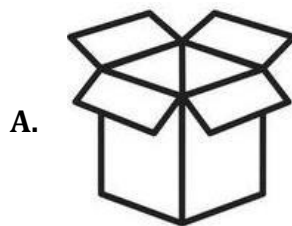


- A. To play with other birds
- B. To keep their eggs safe
- C. To help trees grow
- D. To decorate trees

Q11 Why should we recycle plastic bottles?

- A. To change the shape of the bottles
- B. To reduce pollution
- C. To fill up the recycling bin
- D. To reduce the use of glass bottles

Q12 Which of the given objects does not have any corners?




Q13 If you see a picture of the sun and some clouds, what kind of weather might it represent?



- A. Rainy
- B. Sunny
- C. Partly cloudy
- D. Stormy

Q14 The shell of a tortoise has a unique shape. Which of the following shapes looks most like a tortoise's shell?



- A. Square
- B. Triangle
- C. Circle
- D. Oval

Q15 What does the given symbol represent?



- A. Air circulation
- B. Zebra Crossing
- C. No Parking
- D. Recyclable Material